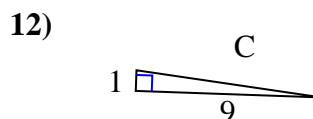
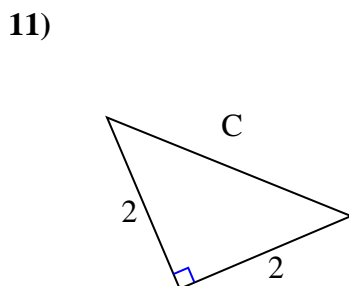
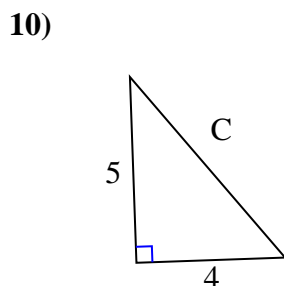
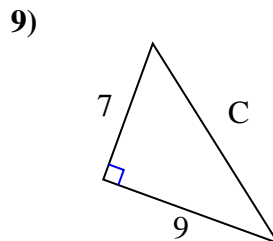
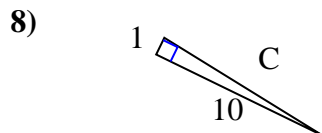
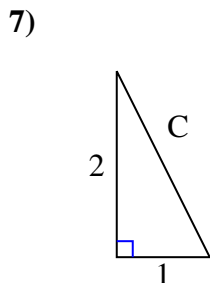
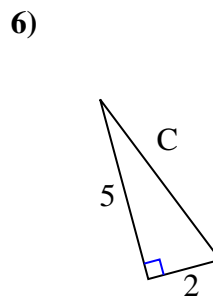
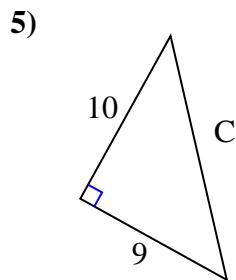
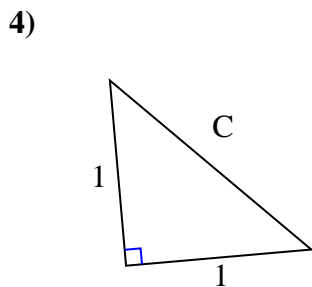
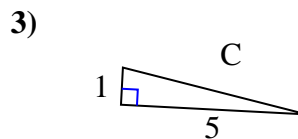
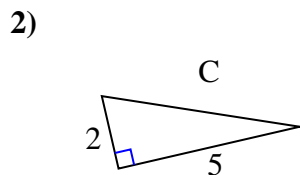
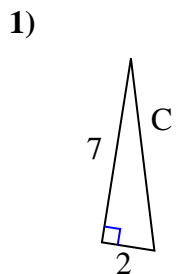




Find the value of 'C' round your answer to the nearest hundredth.

Answers



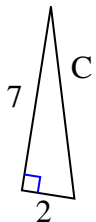
1. _____
2. _____
3. _____
4. _____
5. _____
6. _____
7. _____
8. _____
9. _____
10. _____
11. _____
12. _____



Find the value of 'C' round your answer to the nearest hundredth.

Answers

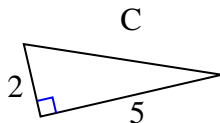
1)



$$49 + 4 = 53$$

$$\sqrt{53} = 7.28$$

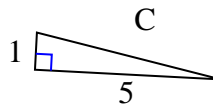
2)



$$4 + 25 = 29$$

$$\sqrt{29} = 5.39$$

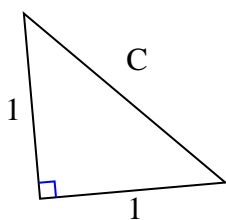
3)



$$1 + 25 = 26$$

$$\sqrt{26} = 5.1$$

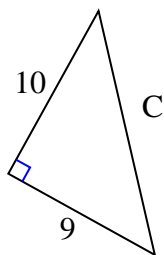
4)



$$1 + 1 = 2$$

$$\sqrt{2} = 1.41$$

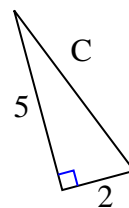
5)



$$100 + 81 = 181$$

$$\sqrt{181} = 13.45$$

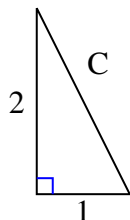
6)



$$25 + 4 = 29$$

$$\sqrt{29} = 5.39$$

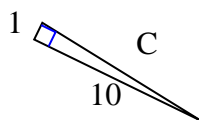
7)



$$4 + 1 = 5$$

$$\sqrt{5} = 2.24$$

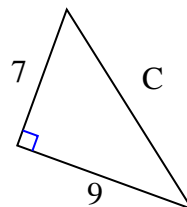
8)



$$1 + 100 = 101$$

$$\sqrt{101} = 10.05$$

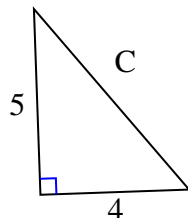
9)



$$49 + 81 = 130$$

$$\sqrt{130} = 11.4$$

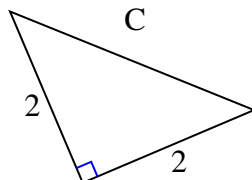
10)



$$25 + 16 = 41$$

$$\sqrt{41} = 6.4$$

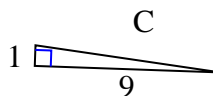
11)



$$4 + 4 = 8$$

$$\sqrt{8} = 2.83$$

12)



$$1 + 81 = 82$$

$$\sqrt{82} = 9.06$$

1. 7.28
2. 5.39
3. 5.1
4. 1.41
5. 13.45
6. 5.39
7. 2.24
8. 10.05
9. 11.4
10. 6.4
11. 2.83
12. 9.06