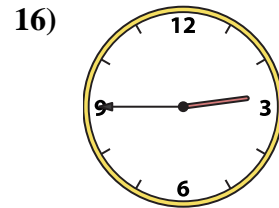
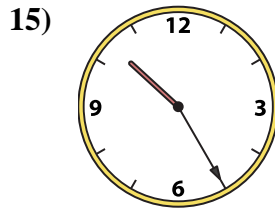
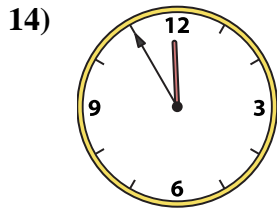
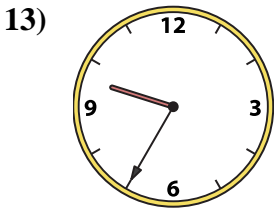
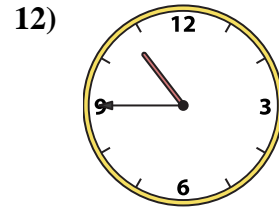
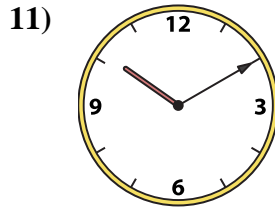
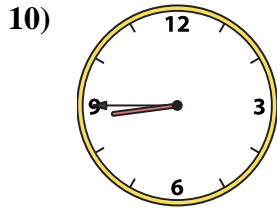
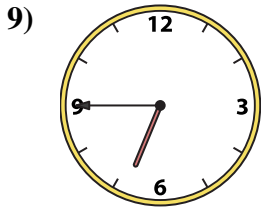
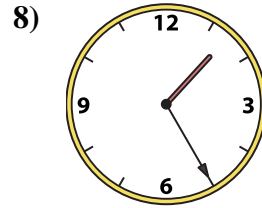
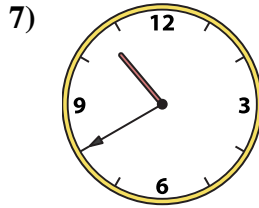
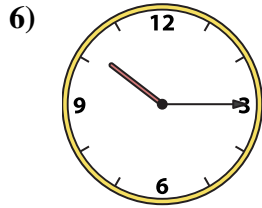
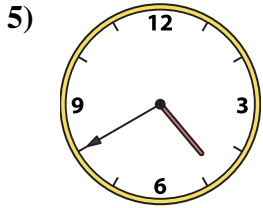
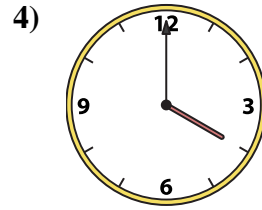
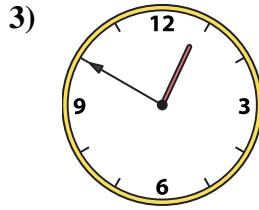
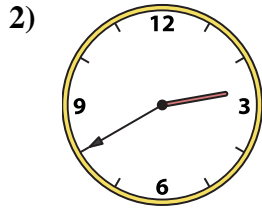
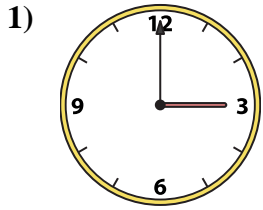




Match the analog clock to the digital clock.



A. 1:25

B. 6:45

C. 10:40

D. 2:45

E. 10:25

F. 2:40

G. 4:40

H. 11:55

I. 3:00

J. 9:35

K. 10:45

L. 4:00

M. 10:15

N. 8:45

O. 10:10

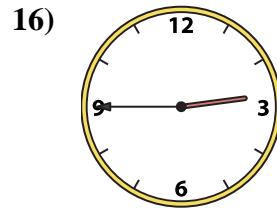
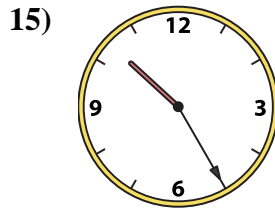
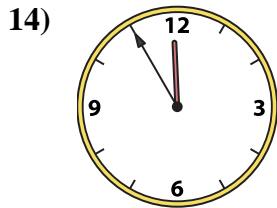
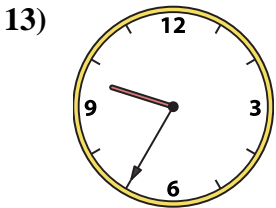
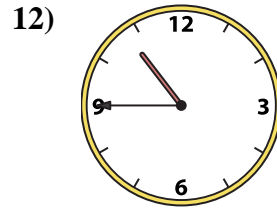
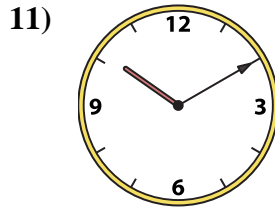
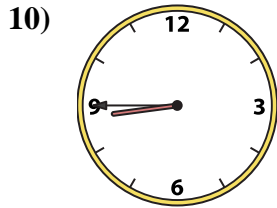
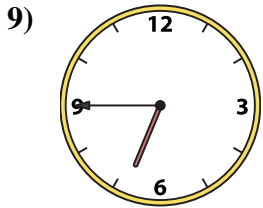
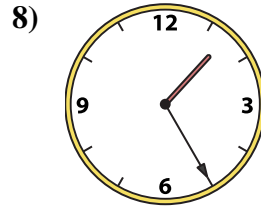
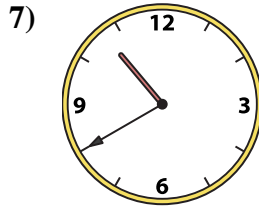
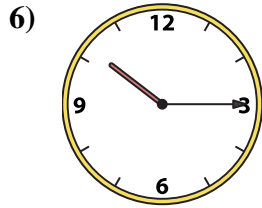
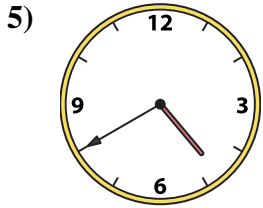
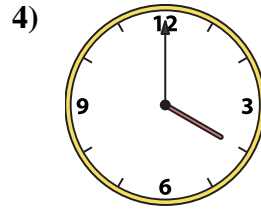
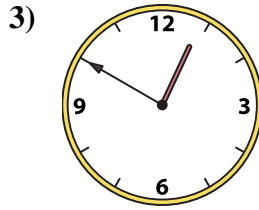
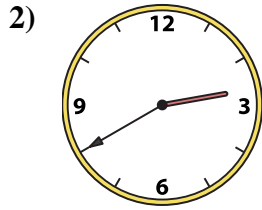
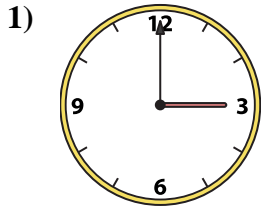
P. 12:50

Answers

1. _____
2. _____
3. _____
4. _____
5. _____
6. _____
7. _____
8. _____
9. _____
10. _____
11. _____
12. _____
13. _____
14. _____
15. _____
16. _____



Match the analog clock to the digital clock.



A. 1:25

B. 6:45

C. 10:40

D. 2:45

E. 10:25

F. 2:40

G. 4:40

H. 11:55

I. 3:00

J. 9:35

K. 10:45

L. 4:00

M. 10:15

N. 8:45

O. 10:10

P. 12:50

Answers

1. **I**

2. **F**

3. **P**

4. **L**

5. **G**

6. **M**

7. **C**

8. **A**

9. **B**

10. **N**

11. **O**

12. **K**

13. **J**

14. **H**

15. **E**

16. **D**