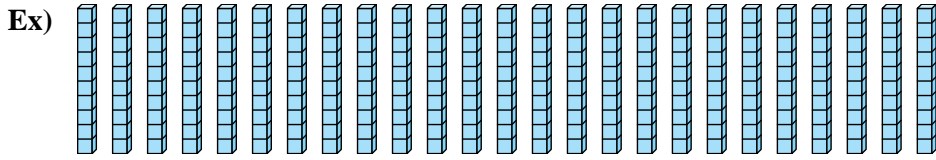


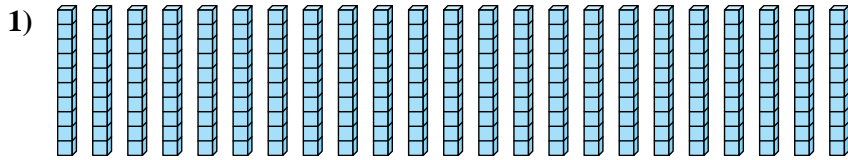


Determine how many groups of 100 can be created from the blocks shown.

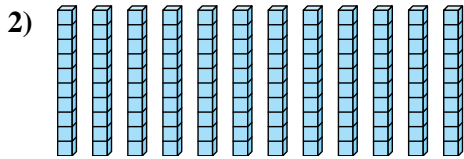
Answers



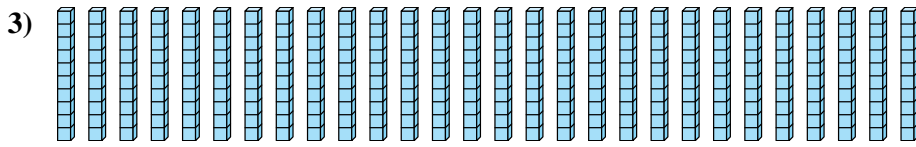
Ex. 2



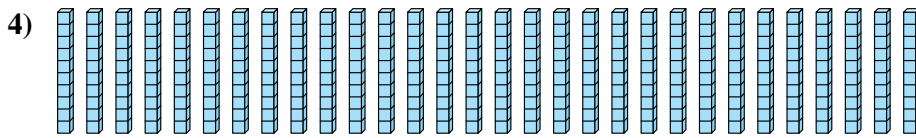
1. \_\_\_\_\_



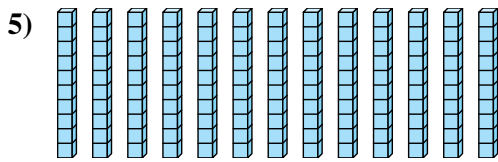
2. \_\_\_\_\_



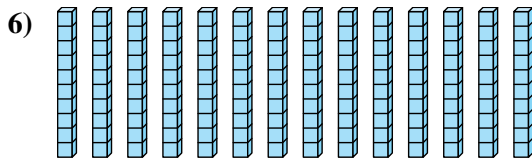
3. \_\_\_\_\_



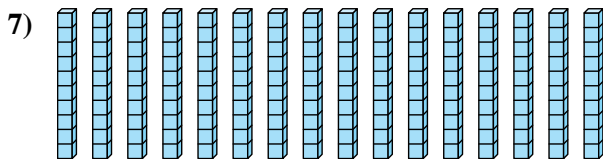
4. \_\_\_\_\_



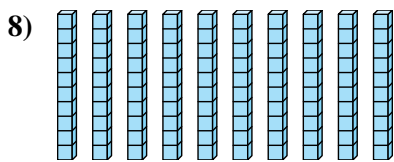
5. \_\_\_\_\_



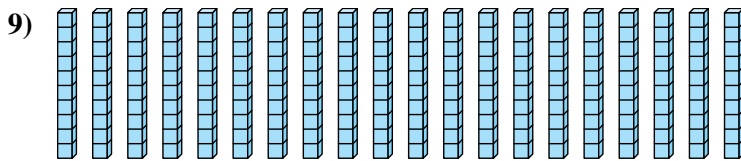
6. \_\_\_\_\_



7. \_\_\_\_\_



8. \_\_\_\_\_



9. \_\_\_\_\_



Determine how many groups of 100 can be created from the blocks shown.

Ex)

1)

2)

3)

4)

5)

6)

7)

8)

9)

Answers

Ex. 2

1. 2

2. 1

3. 2

4. 3

5. 1

6. 1

7. 1

8. 1

9. 2