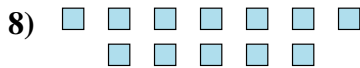
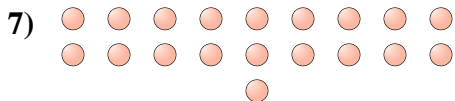
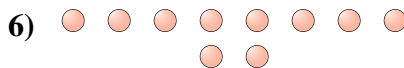

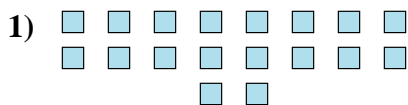




Determine if the number of shapes is even or odd.

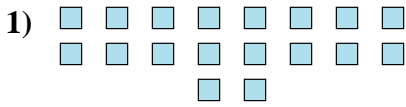


Answers


1. _____
2. _____
3. _____
4. _____
5. _____
6. _____
7. _____
8. _____
9. _____
10. _____



Determine if the number of shapes is even or odd.



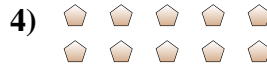
18



20



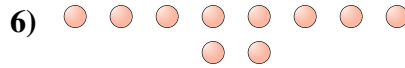
14



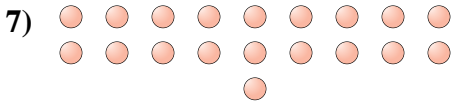
10



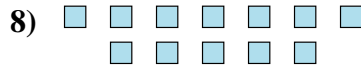
12



10



19



12



7



9

Answers

1. even

2. even

3. even

4. even

5. even

6. even

7. odd

8. even

9. odd

10. odd