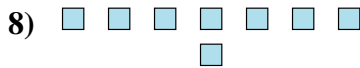
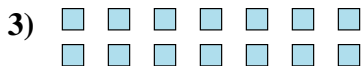
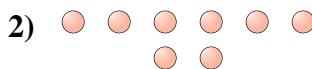




Determine if the number of shapes is even or odd.



Answers

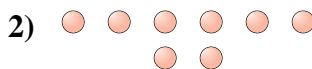
- 1. _____
- 2. _____
- 3. _____
- 4. _____
- 5. _____
- 6. _____
- 7. _____
- 8. _____
- 9. _____
- 10. _____



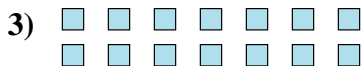
Determine if the number of shapes is even or odd.



15



8



14



10



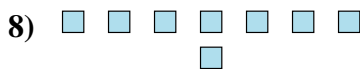
12



8



16



8



11



7

Answers

1. odd

2. even

3. even

4. even

5. even

6. even

7. even

8. even

9. odd

10. odd