




Use the groups to answer each question.

Answers

- 1) a. How many groups of 100 are there?
- b. How many small blocks are there total?

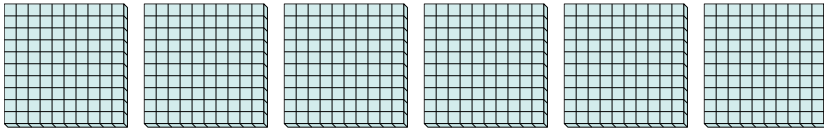


1. _____

2. _____

3. _____

- 2) a. How many groups of 100 are there?
- b. How many small blocks are there total?

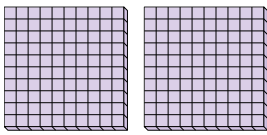


4. _____

5. _____

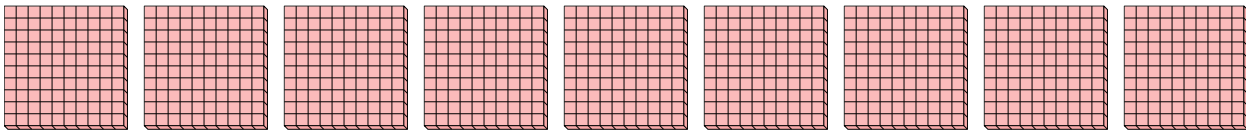
6. _____

- 3) a. How many groups of 100 are there?
- b. How many small blocks are there total?

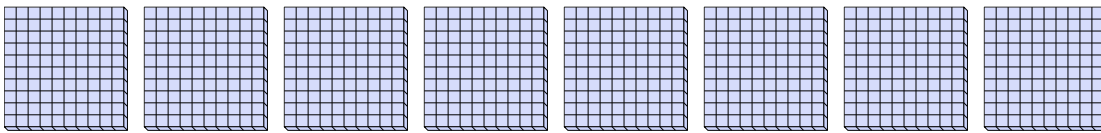


7. _____


- 4) a. How many groups of 100 are there?
- b. How many small blocks are there total?



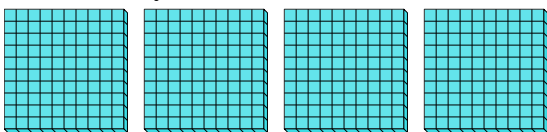
- 5) a. How many groups of 100 are there?
- b. How many small blocks are there total?



- 6) a. How many groups of 100 are there?
- b. How many small blocks are there total?




- 7) a. How many groups of 100 are there?
- b. How many small blocks are there total?



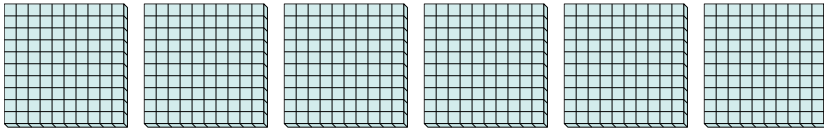


Use the groups to answer each question.

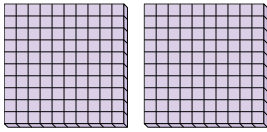
- 1) a. How many groups of 100 are there?
b. How many small blocks are there total?



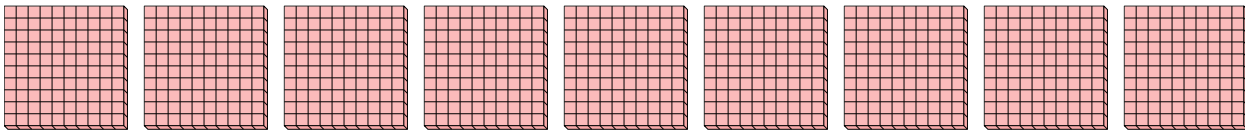
- 2) a. How many groups of 100 are there?
b. How many small blocks are there total?



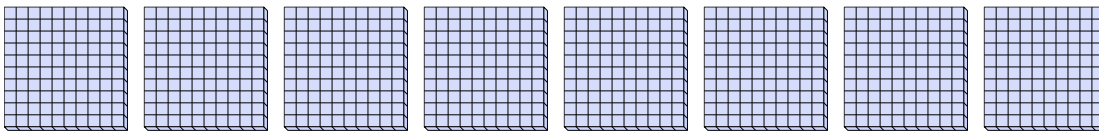
- 3) a. How many groups of 100 are there?
b. How many small blocks are there total?




- 4) a. How many groups of 100 are there?
b. How many small blocks are there total?



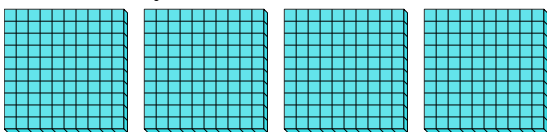
- 5) a. How many groups of 100 are there?
b. How many small blocks are there total?



- 6) a. How many groups of 100 are there?
b. How many small blocks are there total?



- 7) a. How many groups of 100 are there?
b. How many small blocks are there total?



Answers

1. 3 300

2. 6 600

3. 2 200

4. 9 900

5. 8 800

6. 1 100

7. 4 400