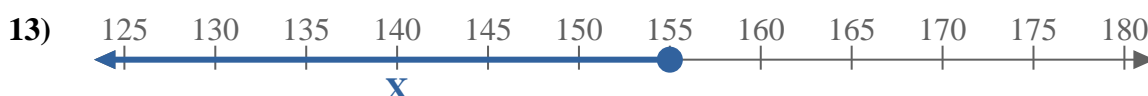
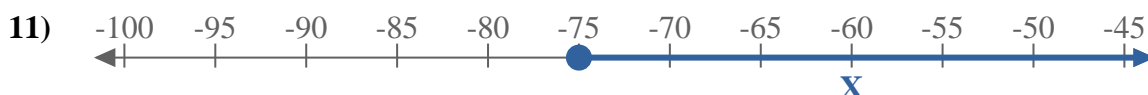
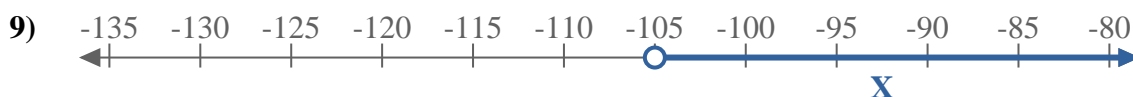
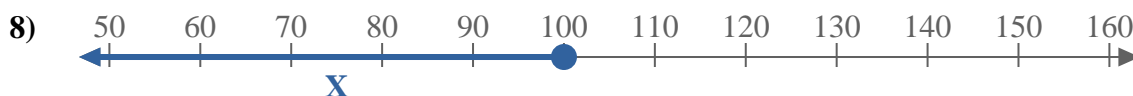
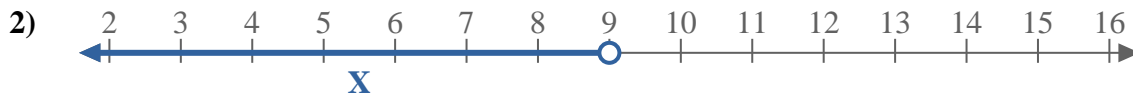
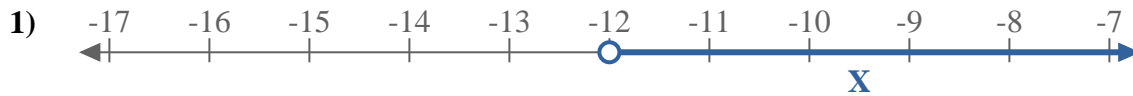




Write an inequality to express the number line.



Answers

Ex. $X \leq 130$

1. _____

2. _____

3. _____

4. _____

5. _____

6. _____

7. _____

8. _____

9. _____

10. _____

11. _____

12. _____

13. _____

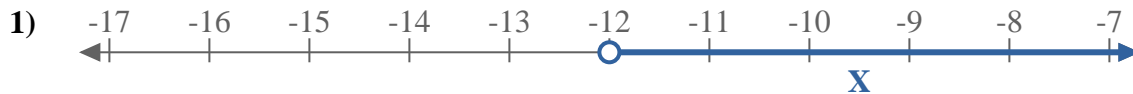


Write an inequality to express the number line.

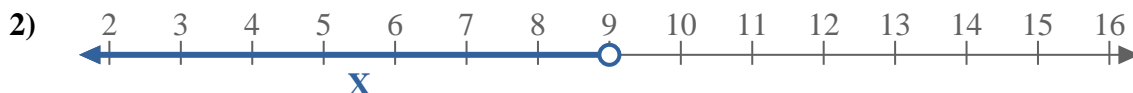


Answers

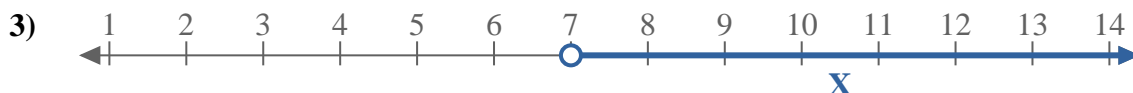
Ex. $X \leq 130$



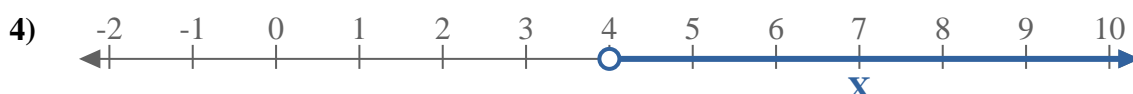
1. $X > -12$



2. $X < 9$



3. $X > 7$



4. $X > 4$



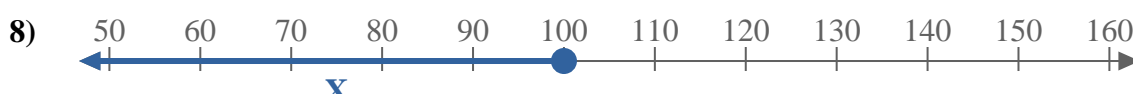
5. $X < 2$



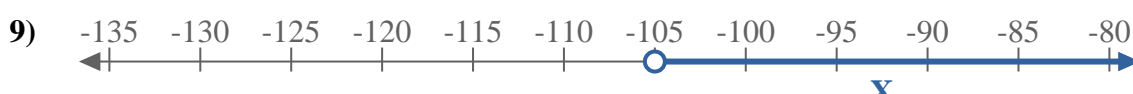
6. $X < -1$



7. $X > 8$



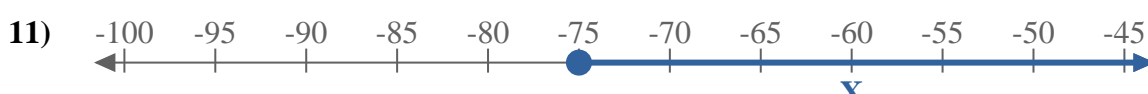
8. $X \leq 100$



9. $X > -105$



10. $X \leq 9$



11. $X \geq -75$



12. $X \leq 8$



13. $X \leq 155$