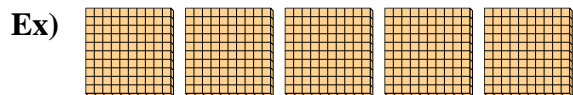
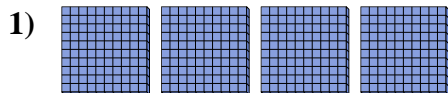




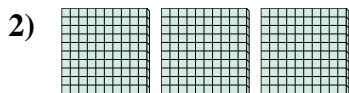
Use the blocks to determine the total quantities.




5 hundreds = 50 tens = 500 ones



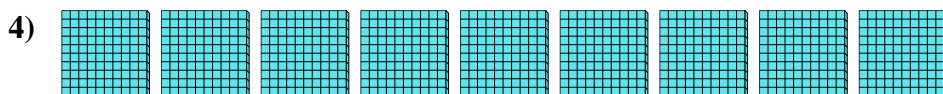
\_\_\_\_\_ hundreds = \_\_\_\_\_ tens = \_\_\_\_\_ ones




\_\_\_\_\_ hundreds = \_\_\_\_\_ tens = \_\_\_\_\_ ones



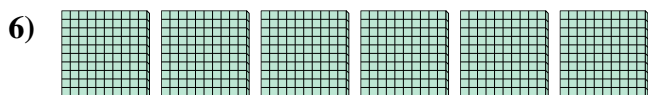
\_\_\_\_\_ hundreds = \_\_\_\_\_ tens = \_\_\_\_\_ ones



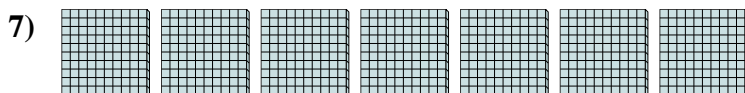
\_\_\_\_\_ hundreds = \_\_\_\_\_ tens = \_\_\_\_\_ ones



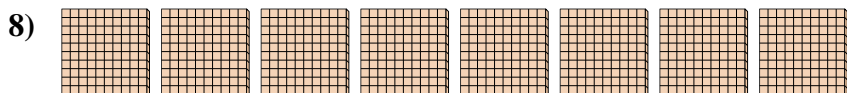
\_\_\_\_\_ hundreds = \_\_\_\_\_ tens = \_\_\_\_\_ ones



\_\_\_\_\_ hundreds = \_\_\_\_\_ tens = \_\_\_\_\_ ones



\_\_\_\_\_ hundreds = \_\_\_\_\_ tens = \_\_\_\_\_ ones



\_\_\_\_\_ hundreds = \_\_\_\_\_ tens = \_\_\_\_\_ ones

Answers

Ex. 5 50 500

1. \_\_\_\_\_

2. \_\_\_\_\_

3. \_\_\_\_\_

4. \_\_\_\_\_

5. \_\_\_\_\_

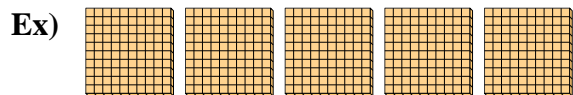
6. \_\_\_\_\_

7. \_\_\_\_\_

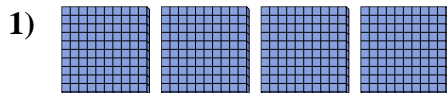
8. \_\_\_\_\_



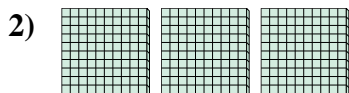
Use the blocks to determine the total quantities.




5 hundreds = 50 tens = 500 ones



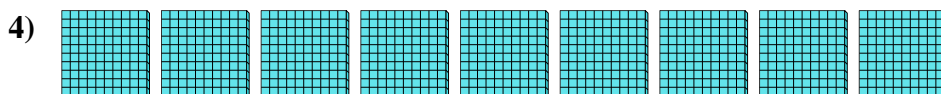
4 hundreds = 40 tens = 400 ones




3 hundreds = 30 tens = 300 ones



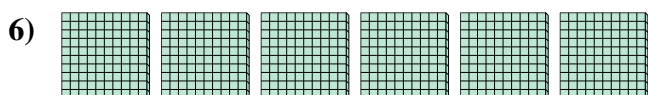
2 hundreds = 20 tens = 200 ones



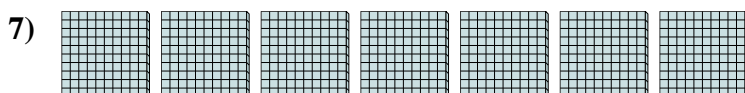
9 hundreds = 90 tens = 900 ones



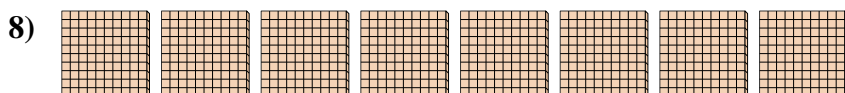
1 hundreds = 10 tens = 100 ones



6 hundreds = 60 tens = 600 ones



7 hundreds = 70 tens = 700 ones



8 hundreds = 80 tens = 800 ones

Answers

Ex.	<u>5</u>	<u>50</u>	<u>500</u>
1.	<u>4</u>	<u>40</u>	<u>400</u>
2.	<u>3</u>	<u>30</u>	<u>300</u>
3.	<u>2</u>	<u>20</u>	<u>200</u>
4.	<u>9</u>	<u>90</u>	<u>900</u>
5.	<u>1</u>	<u>10</u>	<u>100</u>
6.	<u>6</u>	<u>60</u>	<u>600</u>
7.	<u>7</u>	<u>70</u>	<u>700</u>
8.	<u>8</u>	<u>80</u>	<u>800</u>