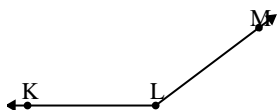




Solve each problem.

Answers

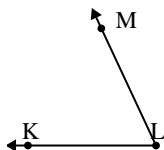
1)



Which choice best represents $\angle KLM$?

- A. 0°
- B. 35°
- C. 115°
- D. 143°

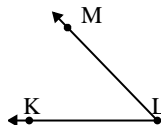
2)



Which choice best represents $\angle KLM$?

- A. 134°
- B. 65°
- C. 18°
- D. 44°

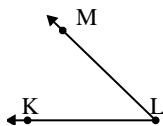
3)



Which choice best represents $\angle KLM$?

- A. 153°
- B. 7°
- C. 46°
- D. 78°

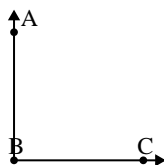
4)



Which choice best represents $\angle KLM$?

- A. 84°
- B. 174°
- C. 44°
- D. 136°

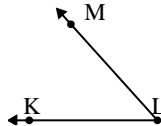
5)



Which choice best represents $\angle ABC$?

- A. 167°
- B. 146°
- C. 90°
- D. 23°

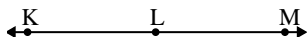
6)



Which choice best represents $\angle KLM$?

- A. 99°
- B. 125°
- C. 48°
- D. 69°

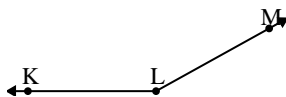
7)



Which choice best represents $\angle KLM$?

- A. 122°
- B. 180°
- C. 65°
- D. 153°

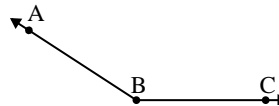
8)



Which choice best represents $\angle KLM$?

- A. 151°
- B. 92°
- C. 115°
- D. 27°

9)



Which choice best represents $\angle ABC$?

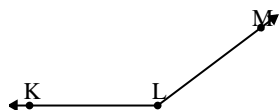
- A. 124°
- B. 89°
- C. 147°
- D. 31°

1. _____
2. _____
3. _____
4. _____
5. _____
6. _____
7. _____
8. _____
9. _____



Solve each problem.

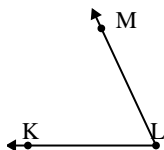
1)



Which choice best represents $\angle KLM$?

- A. 0°
- B. 35°
- C. 115°
- D. 143°

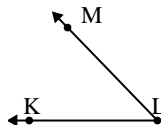
2)



Which choice best represents $\angle KLM$?

- A. 134°
- B. 65°
- C. 18°
- D. 44°

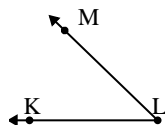
3)



Which choice best represents $\angle KLM$?

- A. 153°
- B. 7°
- C. 46°
- D. 78°

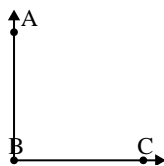
4)



Which choice best represents $\angle KLM$?

- A. 84°
- B. 174°
- C. 44°
- D. 136°

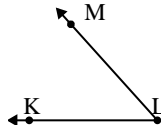
5)



Which choice best represents $\angle ABC$?

- A. 167°
- B. 146°
- C. 90°
- D. 23°

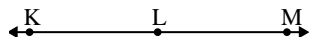
6)



Which choice best represents $\angle KLM$?

- A. 99°
- B. 125°
- C. 48°
- D. 69°

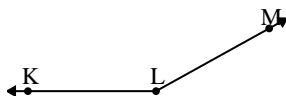
7)



Which choice best represents $\angle KLM$?

- A. 122°
- B. 180°
- C. 65°
- D. 153°

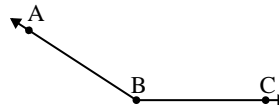
8)



Which choice best represents $\angle KLM$?

- A. 151°
- B. 92°
- C. 115°
- D. 27°

9)



Which choice best represents $\angle ABC$?

- A. 124°
- B. 89°
- C. 147°
- D. 31°

Answers

- 1. **D**
- 2. **B**
- 3. **C**
- 4. **C**
- 5. **C**
- 6. **C**
- 7. **B**
- 8. **A**
- 9. **C**