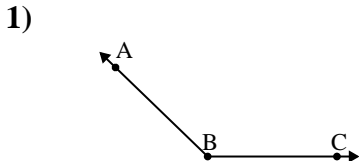




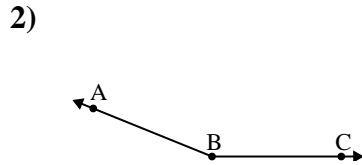
Solve each problem.

Answers



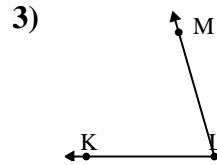
Which choice best represents $\angle ABC$?

- A. 32°
- B. 112°
- C. 174°
- D. 136°



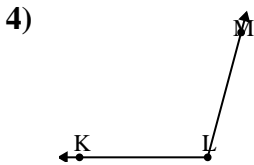
Which choice best represents $\angle ABC$?

- A. 49°
- B. 131°
- C. 4°
- D. 158°



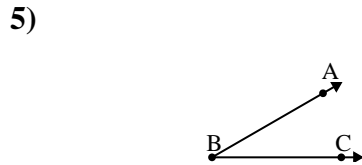
Which choice best represents $\angle KLM$?

- A. 74°
- B. 43°
- C. 103°
- D. 3°



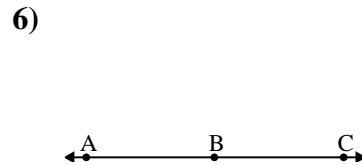
Which choice best represents $\angle KLM$?

- A. 105°
- B. 138°
- C. 67°
- D. 42°



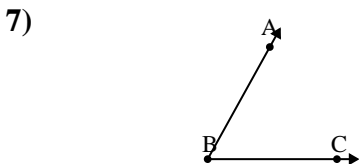
Which choice best represents $\angle ABC$?

- A. 78°
- B. 145°
- C. 30°
- D. 1°



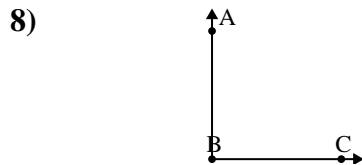
Which choice best represents $\angle ABC$?

- A. 143°
- B. 86°
- C. 14°
- D. 180°



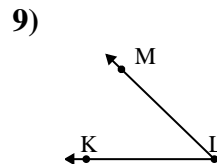
Which choice best represents $\angle ABC$?

- A. 159°
- B. 12°
- C. 97°
- D. 61°



Which choice best represents $\angle ABC$?

- A. 143°
- B. 90°
- C. 165°
- D. 2°



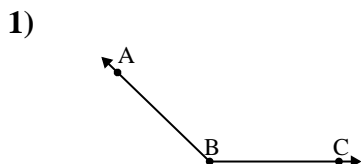
Which choice best represents $\angle KLM$?

- A. 114°
- B. 23°
- C. 44°
- D. 74°

1. _____
2. _____
3. _____
4. _____
5. _____
6. _____
7. _____
8. _____
9. _____

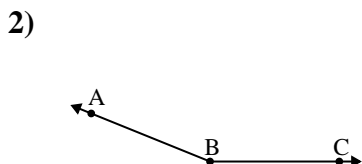


Solve each problem.



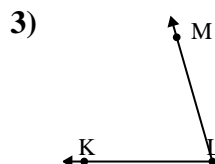
Which choice best represents $\angle ABC$?

- A. 32°
- B. 112°
- C. 174°
- D. 136°



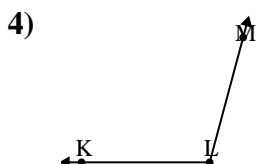
Which choice best represents $\angle ABC$?

- A. 49°
- B. 131°
- C. 4°
- D. 158°



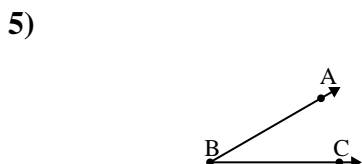
Which choice best represents $\angle KLM$?

- A. 74°
- B. 43°
- C. 103°
- D. 3°



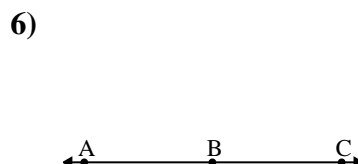
Which choice best represents $\angle KLM$?

- A. 105°
- B. 138°
- C. 67°
- D. 42°



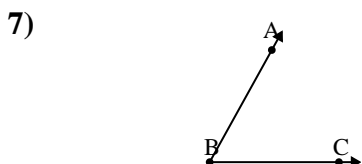
Which choice best represents $\angle ABC$?

- A. 78°
- B. 145°
- C. 30°
- D. 1°



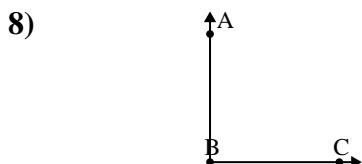
Which choice best represents $\angle ABC$?

- A. 143°
- B. 86°
- C. 14°
- D. 180°



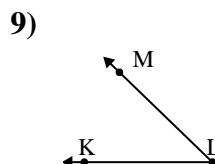
Which choice best represents $\angle ABC$?

- A. 159°
- B. 12°
- C. 97°
- D. 61°



Which choice best represents $\angle ABC$?

- A. 143°
- B. 90°
- C. 165°
- D. 2°



Which choice best represents $\angle KLM$?

- A. 114°
- B. 23°
- C. 44°
- D. 74°

Answers

- 1. **D**
- 2. **D**
- 3. **A**
- 4. **A**
- 5. **C**
- 6. **D**
- 7. **D**
- 8. **B**
- 9. **C**