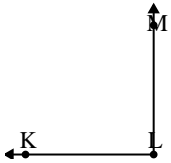




Solve each problem.

Answers

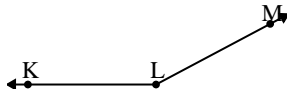
1)



Which choice best represents $\angle KLM$?

- A. 13°
- B. 147°
- C. 90°
- D. 42°

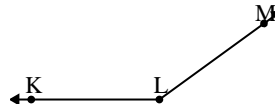
2)



Which choice best represents $\angle KLM$?

- A. 129°
- B. 11°
- C. 178°
- D. 152°

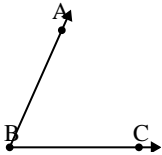
3)



Which choice best represents $\angle KLM$?

- A. 49°
- B. 91°
- C. 1°
- D. 144°

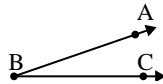
4)



Which choice best represents $\angle ABC$?

- A. 30°
- B. 66°
- C. 97°
- D. 127°

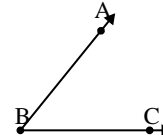
5)



Which choice best represents $\angle ABC$?

- A. 79°
- B. 117°
- C. 19°
- D. 53°

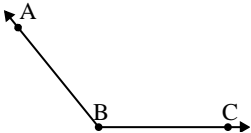
6)



Which choice best represents $\angle ABC$?

- A. 9°
- B. 160°
- C. 51°
- D. 133°

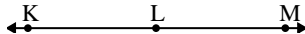
7)



Which choice best represents $\angle ABC$?

- A. 178°
- B. 154°
- C. 129°
- D. 5°

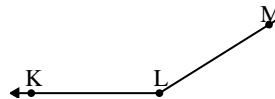
8)



Which choice best represents $\angle KLM$?

- A. 6°
- B. 180°
- C. 59°
- D. 123°

9)



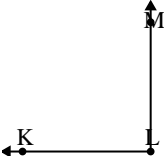
Which choice best represents $\angle KLM$?

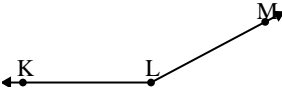
- A. 124°
- B. 64°
- C. 148°
- D. 28°

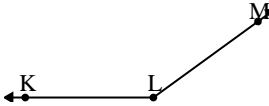
1. _____
2. _____
3. _____
4. _____
5. _____
6. _____
7. _____
8. _____
9. _____

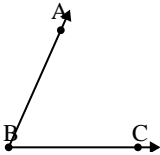


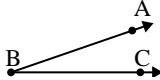
Solve each problem.

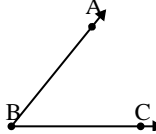
1) 
Which choice best represents $\angle KLM$?
A. 13°
B. 147°
C. 90°
D. 42°

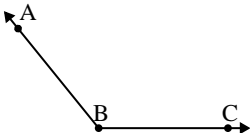
2) 
Which choice best represents $\angle KLM$?
A. 129°
B. 11°
C. 178°
D. 152°

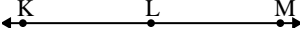
3) 
Which choice best represents $\angle KLM$?
A. 49°
B. 91°
C. 1°
D. 144°

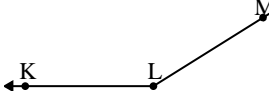
4) 
Which choice best represents $\angle ABC$?
A. 30°
B. 66°
C. 97°
D. 127°

5) 
Which choice best represents $\angle ABC$?
A. 79°
B. 117°
C. 19°
D. 53°

6) 
Which choice best represents $\angle ABC$?
A. 9°
B. 160°
C. 51°
D. 133°

7) 
Which choice best represents $\angle ABC$?
A. 178°
B. 154°
C. 129°
D. 5°

8) 
Which choice best represents $\angle KLM$?
A. 6°
B. 180°
C. 59°
D. 123°

9) 
Which choice best represents $\angle KLM$?
A. 124°
B. 64°
C. 148°
D. 28°

Answers

1. **C**
2. **D**
3. **D**
4. **B**
5. **C**
6. **C**
7. **C**
8. **B**
9. **C**