

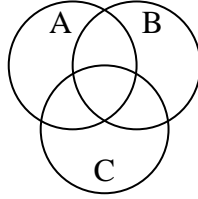


Shade the region shown.

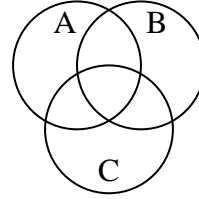
1)  $B \cup A$



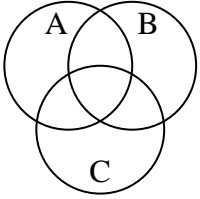
2)  $A - (B \cap C)$



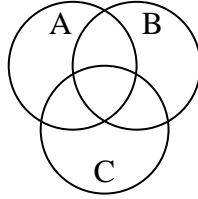
3)  $A - (C \cup B)$



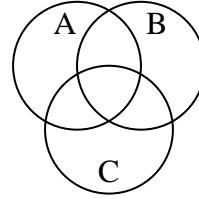
4)  $C \cup A$



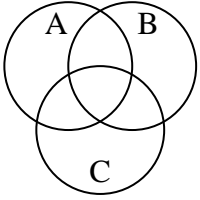
5)  $B - (C \cup A)$



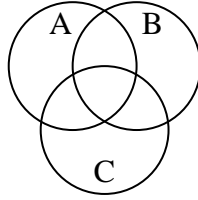
6)  $(C \cup B) - A$



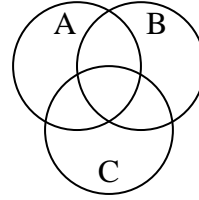
7)  $(B \cup A) - C$



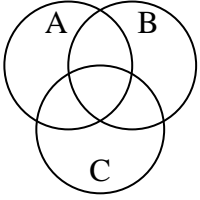
8)  $B - (C \cap A)$



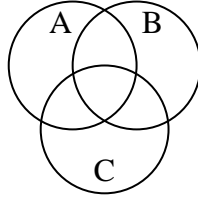
9)  $B \cup (A - C)$



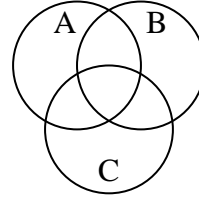
10)  $A \cap (C - B)$



11)  $B \cup A \cup C$



12)  $(A \cup C) - B$



Answers

1. \_\_\_\_\_

2. \_\_\_\_\_

3. \_\_\_\_\_

4. \_\_\_\_\_

5. \_\_\_\_\_

6. \_\_\_\_\_

7. \_\_\_\_\_

8. \_\_\_\_\_

9. \_\_\_\_\_

10. \_\_\_\_\_

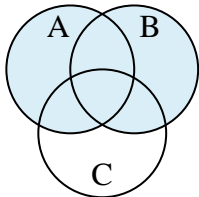
11. \_\_\_\_\_

12. \_\_\_\_\_

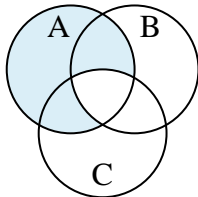


Shade the region shown.

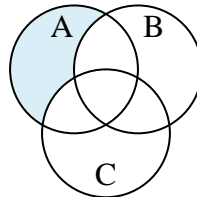
1)  $B \cup A$



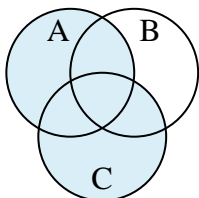
2)  $A - (B \cap C)$



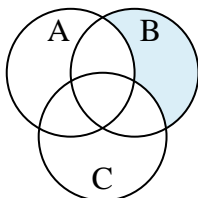
3)  $A - (C \cup B)$



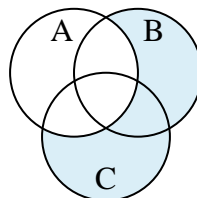
4)  $C \cup A$



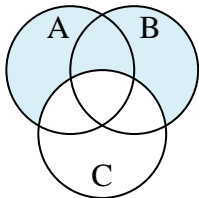
5)  $B - (C \cup A)$



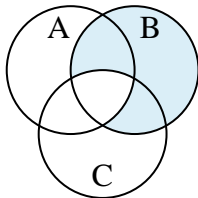
6)  $(C \cup B) - A$



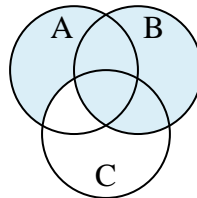
7)  $(B \cup A) - C$



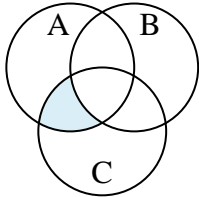
8)  $B - (C \cap A)$



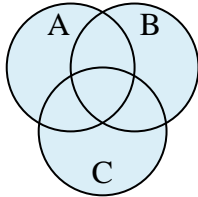
9)  $B \cup (A - C)$



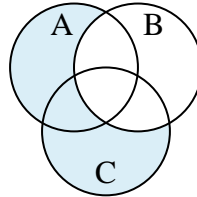
10)  $A \cap (C - B)$



11)  $B \cup A \cup C$



12)  $(A \cup C) - B$



Answers

1.  $B \cup A$
2.  $A - (B \cap C)$
3.  $A - (C \cup B)$
4.  $C \cup A$
5.  $B - (C \cup A)$
6.  $(C \cup B) - A$
7.  $(B \cup A) - C$
8.  $B - (C \cap A)$
9.  $B \cup (A - C)$
10.  $A \cap (C - B)$
11.  $B \cup A \cup C$
12.  $(A \cup C) - B$